



つぎのたしざんをしましょう。

こたえ



① 2 + 1 =

●● ●

⑥ 1 + 1 =

● ●

② 1 + 3 =

● ●●●

⑦ 3 + 1 =

●●● ●

③ 4 + 1 =

●●●● ●

⑧ 1 + 6 =

● ●●●●●

④ 1 + 4 =

● ●●●●

⑨ 1 + 7 =

● ●●●●●●

⑤ 5 + 1 =

●●●●● ●

⑩ 8 + 1 =

●●●●●● ●





つぎのたしざんをしましょう。

こたえ



$$\textcircled{1} \quad 2 \quad + \quad 2 =$$

●● ●●

$$\textcircled{6} \quad 5 \quad + \quad 1 =$$

●●●●● ●

$$\textcircled{2} \quad 3 \quad + \quad 3 =$$

●●● ●●●

$$\textcircled{7} \quad 5 \quad + \quad 5 =$$

●●●●● ●●●●●

$$\textcircled{3} \quad 4 \quad + \quad 4 =$$

●●●● ●●●●

$$\textcircled{8} \quad 2 \quad + \quad 5 =$$

●● ●●●●●

$$\textcircled{4} \quad 3 \quad + \quad 4 =$$

●●● ●●●●

$$\textcircled{9} \quad 4 \quad + \quad 1 =$$

●●●● ●

$$\textcircled{5} \quad 4 \quad + \quad 2 =$$

●●●● ●●

$$\textcircled{10} \quad 6 \quad + \quad 2 =$$

●●●●●● ●●





つぎのたしざんをしましょう。

こたえ



① 4 + 3 =
●●●● ●●●

⑥ 5 + 2 =
●●●●● ●●

② 5 + 3 =
●●●●● ●●●

⑦ 2 + 4 =
●● ●●●●

③ 4 + 5 =
●●●● ●●●●●

⑧ 1 + 6 =
● ●●●●●●

④ 3 + 2 =
●●● ●●

⑨ 4 + 4 =
●●●● ●●●●

⑤ 3 + 3 =
●●● ●●●

⑩ 2 + 8 =
●● ●●●●●●





つぎのたしざんをしましょう。

こたえ



① 4 + 6 =

●●●● ●●●●●●

⑥ 1 + 9 =

● ●●●●●●●●

② 5 + 4 =

●●●●● ●●●●

⑦ 2 + 6 =

●● ●●●●●●

③ 3 + 7 =

●●● ●●●●●●

⑧ 5 + 5 =

●●●●● ●●●●●

④ 4 + 1 =

●●●● ●

⑨ 4 + 3 =

●●●● ●●●

⑤ 8 + 2 =

●●●●●●●● ●●

⑩ 1 + 8 =

● ●●●●●●●











つぎのたしざんをしましょう。



こたえ







① $2 + 6 =$





⑥ $1 + 7 =$





② $5 + 3 =$





⑦ $2 + 6 =$




③ $2 + 7 =$



⑧ $3 + 6 =$



④ $4 + 5 =$



⑨ $4 + 4 =$



⑤ $8 + 1 =$



⑩ $0 + 8 =$











つぎのたしざんをしましょう。



こたえ







① $4 + 0 =$




⑥ $4 + 2 =$
 



② $2 + 3 =$
 


⑦ $2 + 7 =$
 

③ $2 + 8 =$
 

⑧ $3 + 7 =$
 

④ $6 + 3 =$
 

⑨ $3 + 4 =$
 

⑤ $0 + 7 =$


⑩ $5 + 2 =$
