



つぎのたしざんをしましょう。




こたえ




のなかに、とちゅうまでの けいさんけっかを メモすると わかりやすいよ！

1.




$$2 + 3 + 4 =$$

6.




$$5 + 1 + 2 =$$

2.




$$1 + 5 + 3 =$$

7.




$$7 + 2 + 1 =$$

3.




$$4 + 2 + 4 =$$

8.




$$2 + 4 + 3 =$$

4.




$$6 + 1 + 3 =$$

9.




$$4 + 4 + 1 =$$

5.



$$3 + 4 + 2 =$$

10.



$$6 + 1 + 2 =$$

