



つぎのたしざんをしましょう。




こたえ




のなかに、とちゅうまでの けいさんけっかを メモすると わかりやすいよ！

1.




$$1 + 6 + 3 =$$

6.




$$2 + 0 + 5 =$$

2.




$$5 + 2 + 1 =$$

7.




$$8 + 1 + 0 =$$

3.




$$1 + 3 + 4 =$$

8.




$$7 + 1 + 1 =$$

4.




$$3 + 2 + 3 =$$

9.




$$5 + 1 + 3 =$$

5.



$$2 + 1 + 6 =$$

10.



$$4 + 2 + 3 =$$

