



つぎのたしざんをしましょう。




こたえ




のなかに、とちゅうまでの けいさんけっかを メモすると わかりやすいよ！

1.




$$5 + 4 + 2 =$$

6.




$$7 + 6 + 1 =$$

2.




$$3 + 8 + 1 =$$

7.




$$8 + 2 + 5 =$$

3.




$$6 + 5 + 4 =$$

8.




$$9 + 4 + 5 =$$

4.




$$8 + 4 + 2 =$$

9.




$$8 + 1 + 3 =$$

5.



$$5 + 1 + 8 =$$

10.



$$9 + 2 + 7 =$$

