



つぎのたしざんをしましょう。



こたえ




のなかに、とちゅうまでの けいさんけっかを メモすると わかりやすいよ！

1.




$$8 + 4 + 6 =$$

6.




$$8 + 3 + 1 =$$

2.




$$6 + 8 + 5 =$$

7.




$$6 + 2 + 7 =$$

3.




$$10 + 2 + 4 =$$

8.




$$8 + 3 + 8 =$$

4.




$$8 + 5 + 4 =$$

9.




$$4 + 1 + 9 =$$

5.



$$5 + 7 + 6 =$$

10.



$$9 + 1 + 7 =$$

