



つぎのたしざんをしましょう。




こたえ




のなかに、とちゅうまでの けいさんけっかを メモすると わかりやすいよ！

1.




$$4 + 6 + 5 =$$

6.




$$2 + 3 + 9 =$$

2.




$$2 + 10 + 2 =$$

7.




$$9 + 1 + 8 =$$

3.




$$1 + 6 + 6 =$$

8.




$$4 + 5 + 7 =$$

4.




$$8 + 7 + 3 =$$

9.




$$7 + 2 + 8 =$$

5.



$$4 + 5 + 9 =$$

10.



$$8 + 8 + 3 =$$

