



つぎのたしざんをしましょう。




こたえ



のなかに、とちゅうまでの けいさんけっかを メモすると わかりやすいよ！

1.




$$9 + 4 + 5 =$$

6.




$$6 + 5 + 4 =$$

2.




$$6 + 6 + 6 =$$

7.




$$6 + 3 + 3 =$$

3.




$$1 + 8 + 4 =$$

8.




$$2 + 9 + 8 =$$

4.




$$7 + 5 + 3 =$$

9.




$$4 + 9 + 3 =$$

5.



$$5 + 6 + 8 =$$

10.



$$4 + 8 + 5 =$$

