



つぎのたしざんをしましょう。




こたえ



のなかに、とちゅうまでの けいさんけっかを メモすると わかりやすいよ！

1.




$$5 + 4 + 2 =$$

6.




$$7 + 6 + 1 =$$

2.




$$3 + 8 + 1 =$$

7.




$$8 + 2 + 5 =$$

3.




$$6 + 5 + 4 =$$

8.




$$9 + 4 + 5 =$$

4.




$$8 + 4 + 2 =$$

9.




$$8 + 1 + 3 =$$

5.



$$5 + 1 + 8 =$$

10.



$$9 + 2 + 7 =$$





つぎのたしざんをしましょう。




こたえ




のなかに、とちゅうまでの けいさんけっかを メモすると わかりやすいよ！

1.




$$8 + 4 + 6 =$$

6.




$$8 + 3 + 1 =$$

2.




$$6 + 8 + 5 =$$

7.




$$6 + 2 + 7 =$$

3.




$$10 + 2 + 4 =$$

8.




$$8 + 3 + 8 =$$

4.




$$8 + 5 + 4 =$$

9.




$$4 + 1 + 9 =$$

5.



$$5 + 7 + 6 =$$

10.



$$9 + 1 + 7 =$$





つぎのたしざんをしましょう。




こたえ



のなかに、とちゅうまでの けいさんけっかを メモすると わかりやすいよ！

1.




$$10 + 4 + 5 =$$

6.




$$6 + 3 + 7 =$$

2.




$$6 + 10 + 2 =$$

7.




$$9 + 2 + 3 =$$

3.




$$1 + 7 + 4 =$$

8.




$$6 + 5 + 8 =$$

4.



$$6 + 5 + 3 =$$

9.




$$4 + 8 + 4 =$$

5.



$$5 + 5 + 8 =$$

10.



$$8 + 6 + 5 =$$





つぎのたしざんをしましょう。




こたえ




のなかに、とちゅうまでの けいさんけっかを メモすると わかりやすいよ！

1.




$$4 + 6 + 5 =$$

6.




$$2 + 3 + 9 =$$

2.




$$2 + 10 + 2 =$$

7.




$$9 + 1 + 8 =$$

3.




$$1 + 6 + 6 =$$

8.




$$4 + 5 + 7 =$$

4.




$$8 + 7 + 3 =$$

9.




$$7 + 2 + 8 =$$

5.



$$4 + 5 + 9 =$$

10.



$$8 + 8 + 3 =$$





つぎのたしざんをしましょう。




こたえ





のなかに、とちゅうまでの けいさんけっかを メモすると わかりやすいよ！


1. 
 $9 + 4 + 5 =$


6. 
 $6 + 5 + 4 =$


2. 
 $6 + 6 + 6 =$


7. 
 $6 + 3 + 3 =$


3. 
 $1 + 8 + 4 =$

8. 
 $2 + 9 + 8 =$

4. 
 $7 + 5 + 3 =$

9. 
 $4 + 9 + 3 =$

5. 
 $5 + 6 + 8 =$

10. 
 $4 + 8 + 5 =$





つぎのたしざんをしましょう。



こたえ


のなかに、とちゅうまでの けいさんけっかを メモすると わかりやすいよ！

1.




$$4 + 11 + 5 =$$

6.




$$6 + 11 + 2 =$$

2.




$$11 + 5 + 3 =$$

7.




$$10 + 3 + 3 =$$

3.




$$3 + 12 + 4 =$$

8.




$$12 + 3 + 5 =$$

4.



$$13 + 5 + 1 =$$

9.



$$11 + 6 + 1 =$$

5.



$$5 + 9 + 3 =$$

10.



$$9 + 8 + 2 =$$

